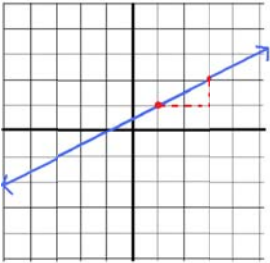


Name \_\_\_\_\_

Date \_\_\_\_\_

Determine the slope of each line by filling in the blanks. The first blank should indicate the sign on the slope. The fraction should indicate the value of the slope.

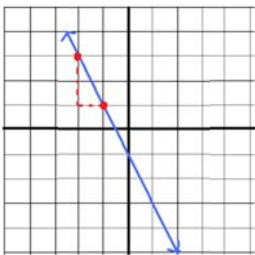
1.



1.

$\frac{\text{input}}{\text{input}}$

2.



2.

$\frac{\text{input}}{\text{input}}$

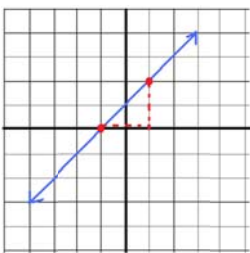
3.



3.

$\frac{\text{input}}{\text{input}}$

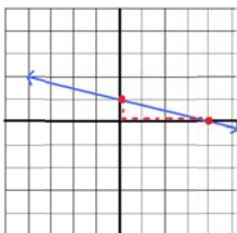
4.



4.

$\frac{\text{input}}{\text{input}}$

5.



5.

$\frac{\text{input}}{\text{input}}$