

## Homework Assignment on Subtraction of Integers

Name \_\_\_\_\_

Subtract the following without using the tiles. Think about the ideas we used today in class to find the answer. A set of tiles is available on the reverse side of this paper.

1.  $+ 3 - (+1) =$

6.  $-2 - (-4) =$

2.  $-4 - (-2) =$

7.  $-3 - (+4) =$

3.  $-6 - (-8) =$

8.  $+1 - (-6) =$

4.  $+5 - (+7) =$

9.  $-4 - (+3) =$


5.  $+1 - (+5) =$

10.  $-3 - (+3) =$


# Yellow and Red Unit Squares




1. \_\_\_\_\_



2. \_\_\_\_\_



3. \_\_\_\_\_



4. \_\_\_\_\_

