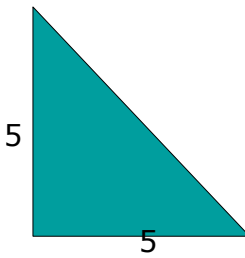
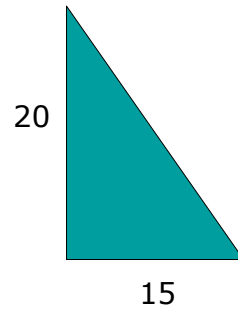
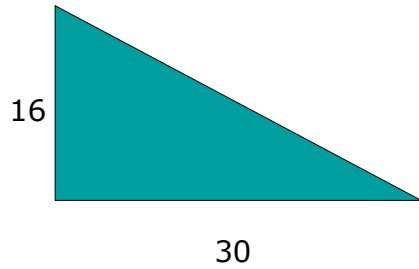


Name _____ Period _____ Date _____

Add the squares to each side of these triangles. Using the information you learned in the lesson today find the area of each of these squares.



After you know the area of the square you built on the hypotenuse, try to find the length of each hypotenuse. Be careful with the last problem. It is a little different. .